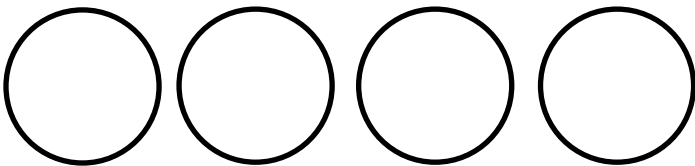
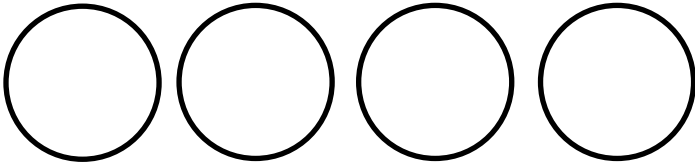
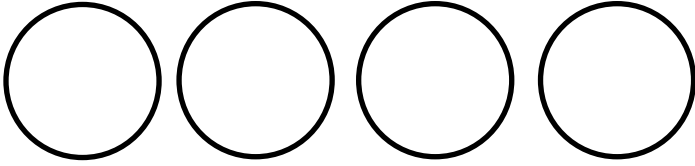
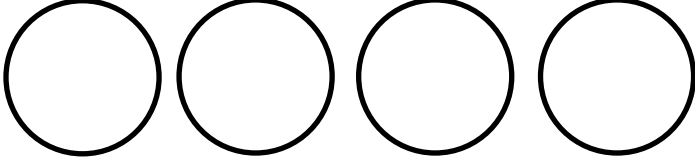






Pour chaque fraction, choisis ou dessine les camemberts correspondants puis colorie le bon nombre de part.

	Fraction	Représentation	=	unité(s) entière (s)	+	part(s) restante(s)
A	$\frac{6}{4}$		=	1	+	$\frac{2}{4}$
B	—		=		+	—
C	—		=		+	—
D	—		=		+	—
E	—		=		+	—
F	—		=		+	—
G	—		=		+	—
I	—		=		+	—

Place les points sur la droite graduée

